













# Resuelve las divisiones

Instrucciones: Resuelve correctamente las siguientes divisiones y anota el resultado en los recuadros correspondientes.

 <input data-bbox="154 609 316 714" type="text"/>	 <input data-bbox="479 609 641 714" type="text"/>	 <input data-bbox="812 609 974 714" type="text"/>	 <input data-bbox="1144 609 1307 714" type="text"/>
---	---	--	---

 <input data-bbox="154 1134 316 1239" type="text"/>	 <input data-bbox="479 1134 641 1239" type="text"/>	 <input data-bbox="812 1134 974 1239" type="text"/>	 <input data-bbox="1144 1134 1307 1239" type="text"/>
--	--	---	--


 <input data-bbox="154 1659 316 1764" type="text"/>	 <input data-bbox="479 1659 641 1764" type="text"/>	 <input data-bbox="812 1659 974 1764" type="text"/>	 <input data-bbox="1144 1659 1307 1764" type="text"/>
---	---	--	---

## Resuelve las divisiones (SOLUCIÓN)

Instrucciones: Resuelve correctamente las siguientes divisiones y anota el resultado en los recuadros correspondientes.



3



6



2



4



5




3



8




5



7



8



8



4